

Revision worksheet (W/S- 3)

Subject: **G. Science**

Chapter: **Air and water**

1. Fill in the blanks with the following appropriate word:

space

moves

air

weight

- a. We can feel air when it _____.
- b. Air takes up _____.
- c. Air has _____.
- d. _____ is needed for burning.



2. Read the following sentences and put a tick (✓) mark on the correct option:

- a. Clean water should be wasted. (True / False)
- b. We need water only for drinking. (True / False)
- c. We get water from rain. (True / False)
- d. We can store water in basket. (True / False)

3. Choose the correct answer and put a tick (✓) mark on it:

1) Moving air is called

- i. wind ii. rain iii. snow

2) Which one can fly


- i. kite ii. table iii. dog

3) A candle flame needs to burn

- i. air ii. water iii. glass

4) Air is

- i. somewhere ii. nowhere iii. everywhere



4. Use the picture clue to write down the correct uses of air and water beside it:

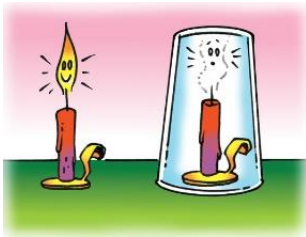
i.



ii.



iii.



iv.








v.



vi.



5. Match the picture with the correct option:

<p>a.</p> 		<p>to wash</p>
<p>b.</p> 		<p>to breathe</p>
<p>c.</p> 		<p>to live</p>
<p>d.</p> 		<p>to dry</p>
<p>e.</p> 		<p>to sail</p>



6. Look at the picture below. Things filled with air are not colored. Color these things and write down the missing letters:



Can you write the names of these things?

a. B ____ l ____ o ____ ____ s

b. T ____ ____ e

c. F ____ o ____ b ____ l ____

Prepared by: Quamrun Nahar Rakhi,

e-mail: qnrakhi@gmail.com